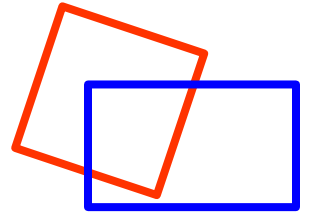


Counting Area vol.2



Area is the size of a surface. You count one square piece as 1 square unit, one triangle piece as $\frac{1}{2}$ square unit.



+



=




$\frac{1}{2}$

$\frac{1}{2}$

1 square unit

1. Make a triangle shape using 1 square piece and 2 triangle pieces.



How many square units is the triangle?



square units



2. Make a triangle shape using 6 square pieces and 4 triangle pieces.

3. Make a rectangle shape using 8 square pieces.

The area of the triangle shape is

square units


The area of the rectangle shape is

square units

Circle the correct word in each bracket.

These are (same / different) shapes with
(same / different) sizes.

★ Make any shape you like and count its area.



The area of the shape I made is square units